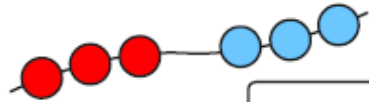


Section 1

Write a number sentence to show how many beads there are altogether.



Section 2

Draw and colour the next 2 cars in the pattern.



Section 3

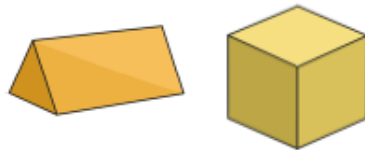
If today is Monday, what is it tomorrow?

Put a circle around the correct day.

Tuesday Wednesday Sunday

Section 5

Draw lines to match the name and the shape.



cube

triangular
prism

Section 6

Which jug is full?
Tick the correct one.



Section 7

Make this clock show 4 o'clock.



Section 4

Imagine seeing 1 elephant at the zoo.

How many legs would you see?

Section 8

How much money is here?



Section 1

I have 2 pairs of shoes.

How many shoes is that altogether?



Section 2

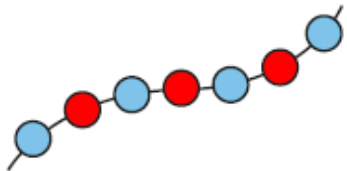
Shep had 3 dog biscuits.

Rover had 4. How many more biscuits did Rover have?



Section 3

Count the beads and write the number.



Section 4


I have 16p and I lose 5p.

How much money have I got left?



Section 5

Cut the cake in half.




Section 6

What numbers are missing?

9	8	7	6			3		1
---	---	---	---	--	--	---	--	---

Section 7

What time is it?



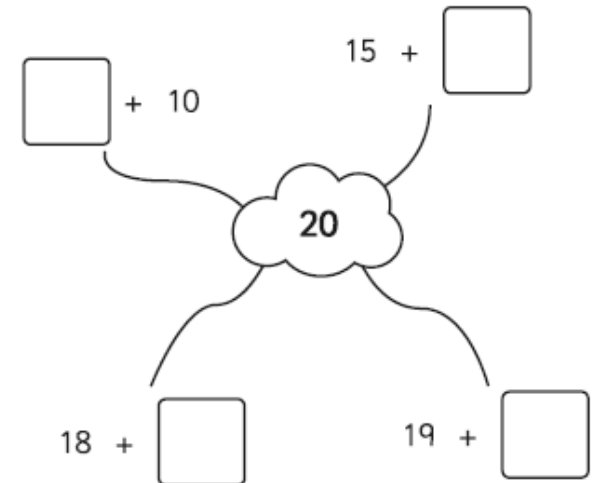
5 o'clock

Half past 6

Half past 5

Section 8

Complete the number pairs:



Section 1

There are 20 biscuits in a packet.

Grace eats 5.

Sara eats 6.

How many are left in the packet?



Section 2

Match the numbers with their names:

12 sixteen

15 eight

8 twelve

16 fifteen

Section 5

Draw the coins you need to make 14p.

Section 6

Choose the correct symbol to complete the number sentence.

- × +

2 5 = 7

8 4 = 4

Section 3

Which would weigh more? Circle the heaviest.



or



or



or



Section 4

20 → 10 less →

50 → 10 less →

80 → 10 less →

30 → 10 less →

Section 7

Draw a picture to show this:
 $1 + 9 = 10$

Section 8

It's Mickey's birthday tomorrow. Today is Saturday. What day is Mickey's birthday?